

Assignment:-3

Subject: Maths Class:-I

Teacher:-Mrs. Paramjeet Kaur

Name:-_____

Class & Sec.:-_____

Roll No.:-_____

Date:-_____

Q1) Complete the following blanks.

Name : _____

No. of corners : _____

No. of sides : _____



Name : _____

No. of corners : _____

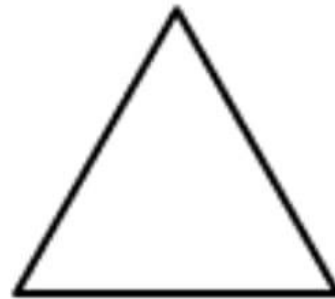
No. of sides : _____



Name : _____

No. of corners : _____

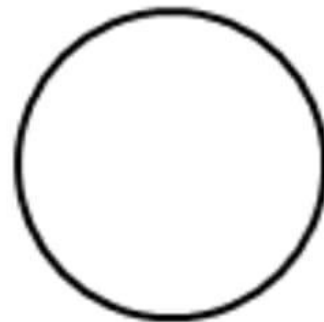
No. of sides : _____




Name : _____

No. of corners : _____


No. of sides : _____

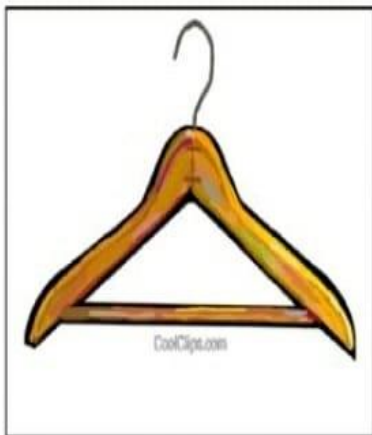


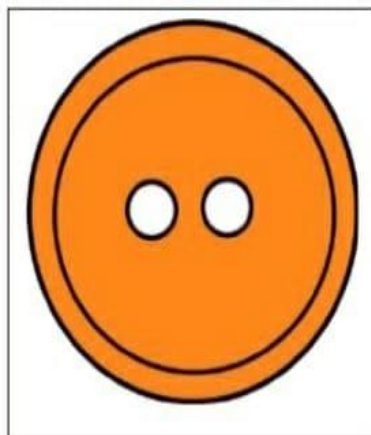
Q2) Write the shape of each object.



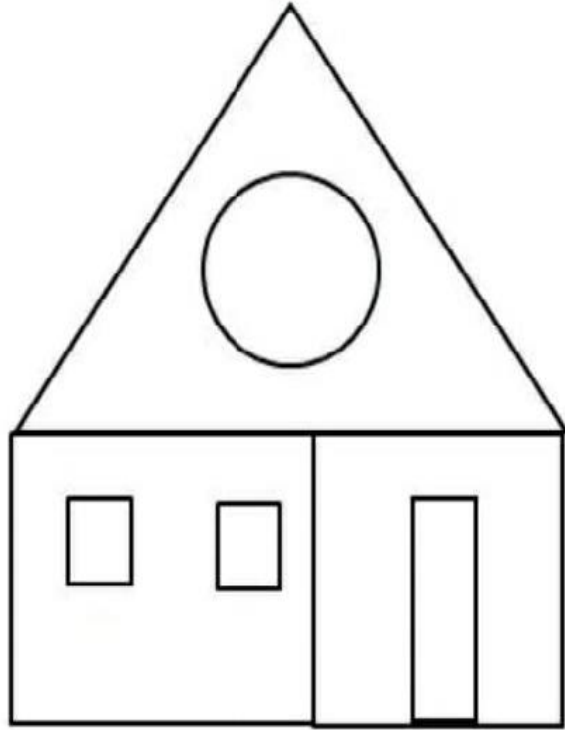




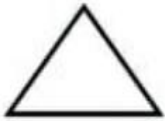






Q.3)




Count the shapes in the above picture.









Q.4) Draw the two missing shapes to complete each of the pattern below.

